

Welland Gouldsmith School

Science

Class - III

Time: 60 minutes

Choose the correct answer from the box:

leaves

potato

stem

roots

carrot

sun

sugarcane

water

flower

radish

1. To grow a plant needs _____ and _____.

2. The _____ on the plant helps to make seeds and fruits.

3. The _____ absorbs the water and holds the

plant in the soil.

4. The _____ use the sun and air to make food for the plant.

5. The _____ brings water to the rest of the plant.

6. _____ and _____ are roots of a plant.

7. _____ and _____ are the stems of a plant.



Tick the correct option:



1. A sense organ that helps us to smell the food.

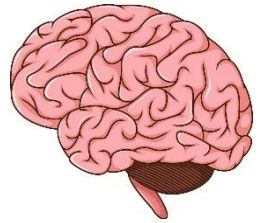
- eyes skin nose tongue

2. The system that helps in producing babies.

- Skeletal muscular digestive reproductive


3. The thread like tubes that carry messages to and from the brain.

- Vessels tissues saliva nerves



4. Small intestine is the part of _____ system.

- Nervous skeletal digestive respiratory



5. Kidney is the part of _____ system.

- Digestive nervous respiratory excretory

KIDNEYS

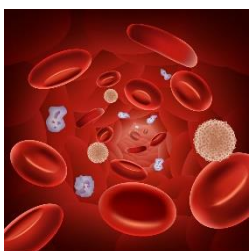
6. Living things breathe through _____ organs.

- Legs lungs kidney heart



7. The smallest part of our body is called _____.

- Tissues cells skin bloods



8. Red fluid that carries oxygen and food to all body parts.

- Cells vessels blood nerves

Fill in the blanks with the words given in the below:

grow

food

move

waste

reproduce

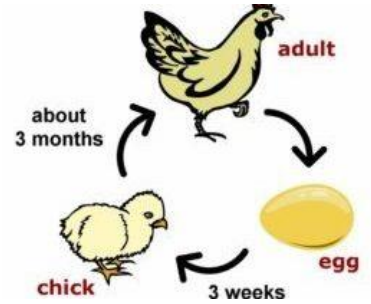
1. All living things can _____. Some walk, some swim, some fly.

2. All living things _____ and get bigger.

3. All living things get rid of _____.

4. All living things can _____. Some lay eggs, some have babies, some produce seeds.

5. Living things need _____ to grow.



b. Write TRUE or FALSE:



1. Human beings are living things. _____

2. Non-living things can breathe. _____

3. Water and air are living things. _____


4. Living things can grow. _____

5. Non-living things have senses. _____



c. Draw, name and colour:

1. A living thing



2. A non-living thing

